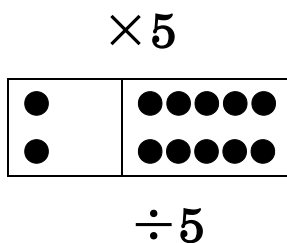
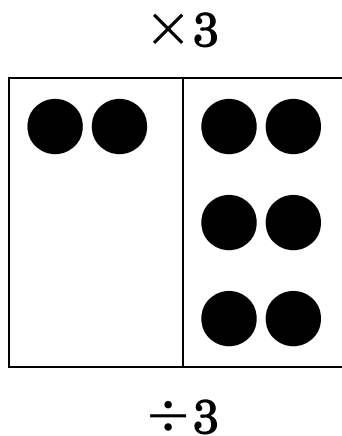
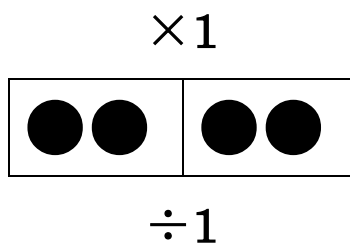
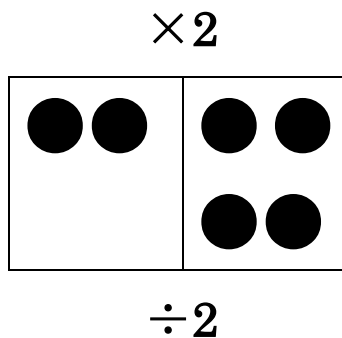
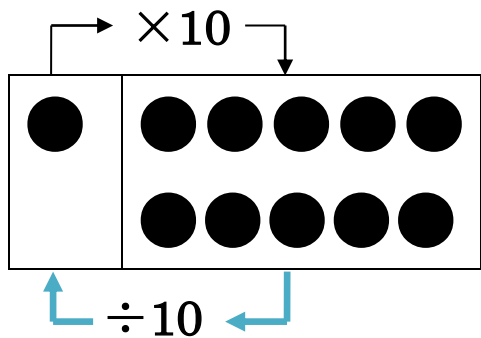
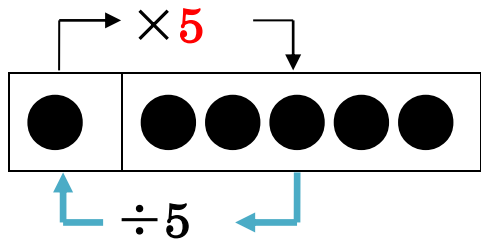
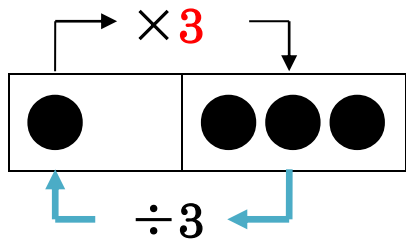
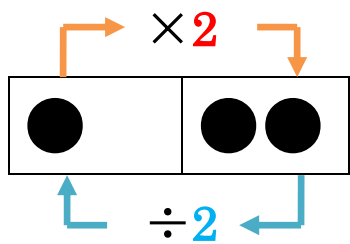


次の2つの数量の関係を×÷を使って表しなさい。

月 日 () 氏名【



次の2つの数量の関係を×÷を使って表しなさい。

月 日 () 氏名【

$$\begin{array}{c} \times \\ \boxed{1 \quad 2} \\ \div \end{array}$$

$$\begin{array}{c} \times \\ \boxed{2 \quad 4} \\ \div \end{array}$$

$$\begin{array}{c} \times \\ \boxed{1 \quad 3} \\ \div \end{array}$$

$$\begin{array}{c} \times \\ \boxed{2 \quad 2} \\ \div \end{array}$$

$$\begin{array}{c} \times \\ \boxed{1 \quad 5} \\ \div \end{array}$$

$$\begin{array}{c} \times \\ \boxed{2 \quad 6} \\ \div \end{array}$$

$$\begin{array}{c} \times \\ \boxed{1 \quad 10} \\ \div \end{array}$$

$$\begin{array}{c} \times \\ \boxed{2 \quad 10} \\ \div \end{array}$$

$$\begin{array}{c} \times \\ \boxed{1 \quad 1} \\ \div \end{array}$$

$$\begin{array}{c} \times \\ \boxed{2 \quad 20} \\ \div \end{array}$$

次の2つの数量の関係を×÷を使って表しなさい。

月 日 () 氏名【

$$\begin{array}{c} | \quad \times \\ \hline 10 \quad 20 \\ \hline \div \end{array}$$

$$\begin{array}{c} \times \\ \hline 20 \quad 40 \\ \hline \div \end{array}$$

$$\begin{array}{c} \times \\ \hline 10 \quad 30 \\ \hline \div \end{array}$$

$$\begin{array}{c} \times \\ \hline 20 \quad 20 \\ \hline \div \end{array}$$

$$\begin{array}{c} \times \\ \hline 10 \quad 50 \\ \hline \div \end{array}$$

$$\begin{array}{c} \times \\ \hline 20 \quad 60 \\ \hline \div \end{array}$$

$$\begin{array}{c} \times \\ \hline 10 \quad 100 \\ \hline \div \end{array}$$

$$\begin{array}{c} \times \\ \hline 20 \quad 100 \\ \hline \div \end{array}$$

$$\begin{array}{c} \times \\ \hline 10 \quad 10 \\ \hline \div \end{array}$$

$$\begin{array}{c} \times \\ \hline 20 \quad 200 \\ \hline \div \end{array}$$

次の2つの数量の関係を×÷を使って表しなさい。

月 日 () 氏名【

$$\begin{array}{c} \times \\ \boxed{100 \quad 200} \\ \div \end{array}$$

$$\begin{array}{c} \times \\ \boxed{200 \quad 400} \\ \div \end{array}$$

$$\begin{array}{c} \times \\ \boxed{100 \quad 300} \\ \div \end{array}$$

$$\begin{array}{c} \times \\ \boxed{200 \quad 200} \\ \div \end{array}$$

$$\begin{array}{c} \times \\ \boxed{100 \quad 500} \\ \div \end{array}$$

$$\begin{array}{c} \times \\ \boxed{200 \quad 600} \\ \div \end{array}$$

$$\begin{array}{c} \times \\ \boxed{100 \quad 1000} \\ \div \end{array}$$

$$\begin{array}{c} \times \\ \boxed{200 \quad 1000} \\ \div \end{array}$$

$$\begin{array}{c} \times \\ \boxed{100 \quad 100} \\ \div \end{array}$$

$$\begin{array}{c} \times \\ \boxed{200 \quad 2000} \\ \div \end{array}$$